


Travail demandé :

Expliquer les symboles suivants :

①



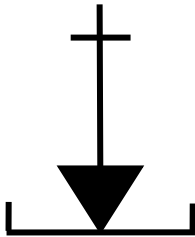
.....

.....

.....

.....

②



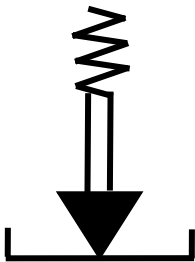
.....

.....

.....

.....

③



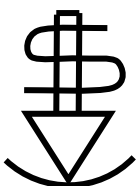
.....

.....

.....

.....

④



.....

.....

.....

.....